

【眾裏尋它】




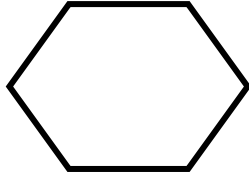
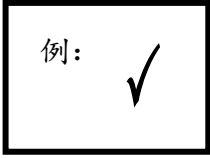
姓名：_____ ()

班別：_____


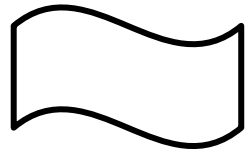


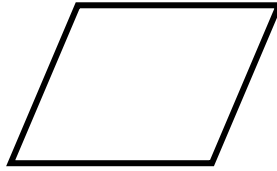
日期：_____

小心觀察下列各題，找出四邊形的特性：(在符合四邊形特性的圖形內加上✓，如例)

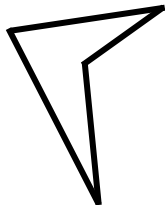
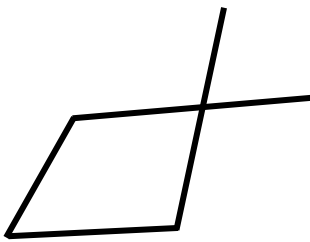
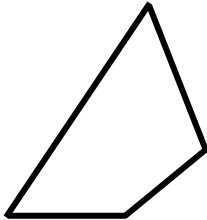
1. 四邊形由多少條線組成？




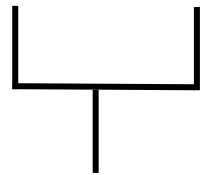
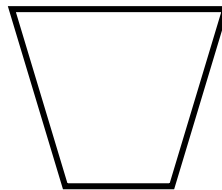
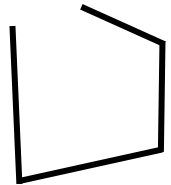
2. 四邊形由怎樣的線組成？



3. 四邊形具有多少隻角？



4. 四邊形是一個閉合的圖形嗎？



總結你的觀察：

四邊形是由_____條_____線組成一個有_____隻角的_____圖形。