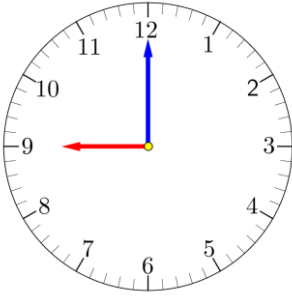
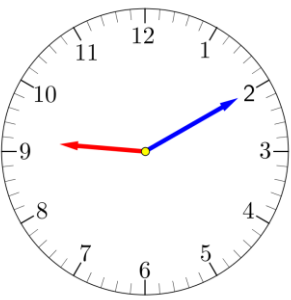
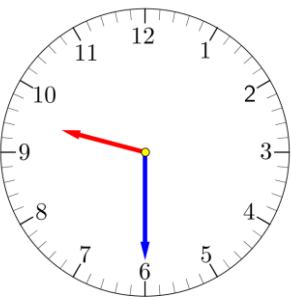
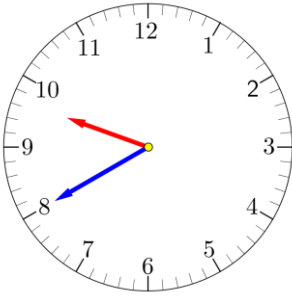
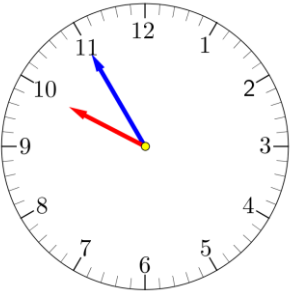
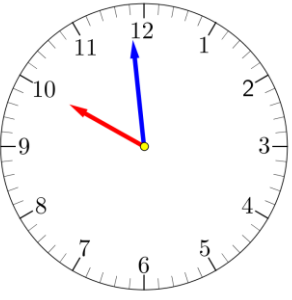
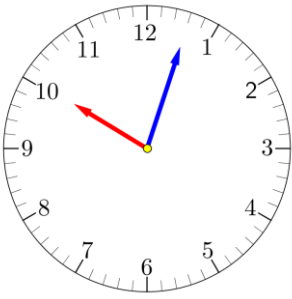
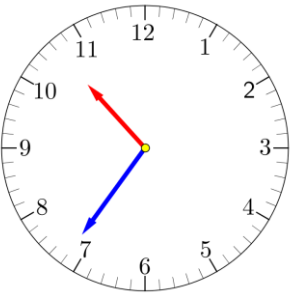
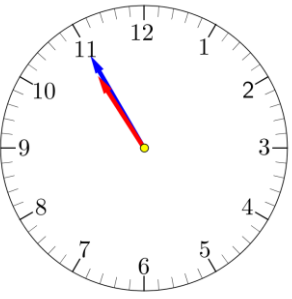
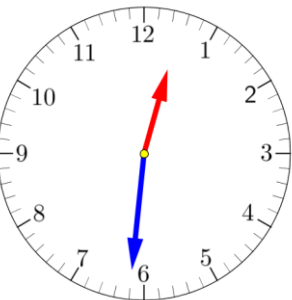
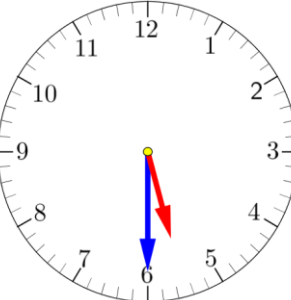
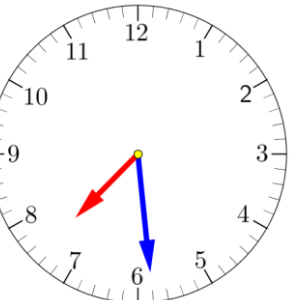


Tell the time on each of the following clocks.

<p><b>Example</b></p>  <p><b>9 o'clock</b></p>	<p><b>1 .</b></p>  <p><b>___ minutes past 9</b></p>	<p><b>2 .</b></p>  <p><b>half past ___</b></p>
<p><b>3.</b></p>  <p><b>___ minutes to 10</b></p>	<p><b>4,</b></p>  <p><b>___ minutes to ___</b></p>	<p><b>5.</b></p>  <p><b>___ minute to ___</b></p>
<p><b>6.</b></p>  <p><b>___ minutes to/past ___</b></p>	<p><b>7.</b></p>  <p><b>___ minutes to/past ___</b></p>	<p><b>8.</b></p>  <p>_____</p>
<p><b>9.</b></p>  <p>_____</p>	<p><b>10.</b></p>  <p>_____</p>	<p><b>11.</b></p>  <p>_____</p>